



परीक्षार्थी द्वारा भरा जावे ↓

परीक्षा का विषय	विषय कोड	परीक्षा का माध्यम
Physics 2	10	English

स्टीकर तीर के निशान ↓ से चिनाकर चसाए

परीक्षार्थी द्वारा भरा जावे

माध्यमिक शिक्षा मण्डल, म.प्र., भोपाल

SECONDARY EDUCATION MADHYAPRADESH

परीक्षार्थी का रोल नम्बर

अंको में

2	3	6	7	2	5	2	4	2	X
---	---	---	---	---	---	---	---	---	---

शब्दों में

तीन सात दो पौन दो चार दो X

BOARD OF SECONDARY EDUCATION MADHYAPRADESH BHOPAL

केन्द्राध्यक्ष/सहायक केन्द्राध्यक्ष एवं परीक्षक द्वारा भरा जावे

प्रश्न पत्र का सेट **C**

क - परीक्षार्थी का कक्ष क्रमांक **06**

ख - परीक्षा का दिनांक **06-03-2023**

परीक्षा का नाम एवं परीक्षा केन्द्र क्रमांक की मुद्रा

H.S.S.

केन्द्र नं. 671001

पर्यवेक्षक का नाम एवं हस्ताक्षर

केन्द्राध्यक्ष/सहायक केन्द्राध्यक्ष के हस्ताक्षर

[Signature] *[Signature]*

परीक्षक एवं उपमुख्य परीक्षक द्वारा भरा जावे ↓

परीक्षक एवं उपमुख्य परीक्षक द्वारा भरा जावे

प्रमाणित किया जाता है कि होलोग्राफ स्टिकर क्षतिग्रस्त नहीं पाया गया तथा अन्दर के पृष्ठों के अनुरूप मुख्य पृष्ठ पर अंकों की प्रविष्टि एवं अंकों का योग सही है।

निर्धारित मुद्रा : नाम, पदनाम, मोबाईल नम्बर, परीक्षक क्रमांक एवं पदांकित संस्था के नाम की मुद्रा लगाएं।

उप मुख्य परीक्षक के हस्ताक्षर एवं निर्धारित मुद्रा

परीक्षक के हस्ताक्षर एवं निर्धारित मुद्रा

A.N. PANDEY
V.N.-741351
G.J.E.H.S.S.Mandla

Yogesh Choudhary
V.N.-741352
G.H.S.S.No.-2 Mandla

प्रश्न क्रमांक	पृष्ठ क्रमांक	प्राप्तांक (100 में)
1		
2		
3		
4		
5		
6		
7		
8		
9		
10		
11		
12		
13		
14		
15		
16		
17		
18		
19		
20		
21		
22		
23		
24		
25		
26		
27		
28		
29		
30		
31		
32		

Vedi 59 GHA



Correct the options :-

Answers :-

- (a) (ii) Mumbai ✓
 (b) (iii) 0.72 eV ✓
 (c) (i) Junction diode ✓
 (d) (i) less than ✓
 (e) (ii) 1.67×10^{-27} kg ✓
 (f) (ii) Ampere / metre² ✓
 (g) (iii) $\frac{\Delta}{2}$ ✓

Question no. → (2)

Fill in the blanks

Answers :-

- (i) Zero ✓
 (ii) ~~remain same~~ (constant) ✓
 (iii) Gamma rays ✓
 (iii) Megahertz ✓
 (iii), 10^{14} Hertz ✓
 (iv) decreased ✓
 (v) Vector ✓
 (vi) Sensitivity ✓
 (vii) Zero ✓

True or False :-

Answers

(i) True ✓

(ii) True ✓

(iii) False ✓

(iv) False ✓

(v) True ✓

(vi) False ✓

(vii) False ✓

Question no. → (4)

One word

Answers

(i) → Bending of light through the edges of slit is called diffraction.

(ii) → Dioptre (D)

(iii) → From South pole to North pole.

(iv) → A high resistance wire is connected in series with the coil of galvanometer.

(v) → Drift velocity decreases.

(vi) → $E = \frac{1}{2}mv^2(\text{max}) = R(v - v_0)$

(vii) → Minimum frequency exist with



Which the electrons get emitted out of the metal surface is called threshold frequency.

Question no. → 5

Biot Savart law :- Biot Savart deduce an expression for the intensity of magnetic and current carrying conductor I .

Let XY be a conductor with current I carrying in it has small element dl i.e., current element and a point P is taken at distance r from the current element where the intensity of magnetic field dB is found.

The Intensity of magnetic field is dB given by :-

(i) directly proportional to the current.
 $dB \propto I$ — (1)

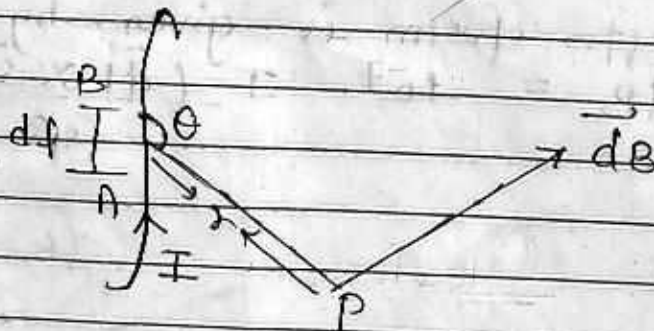
(ii) dB to the $\sin \theta$ where θ is angle b/w the small element and observation point.

$$dB \propto \sin \theta \quad \text{--- (2)}$$

(iii) dB is directly proportional to current element

$$dB \propto dl \quad \text{--- (3)}$$

$$(iv) \quad dB \propto \frac{1}{r^2} \quad \text{--- (4)}$$



$$dB \propto \frac{I dl \sin \theta}{r^2}$$

$$dB = k \frac{I dl \sin \theta}{r^2}$$

$$k = \frac{\mu_0}{4\pi}$$

$$dB = \frac{\mu_0}{4\pi} \frac{I dl \sin \theta}{r^2} \text{ Tesla}$$

$$dB = 10^{-7} \frac{I dl \sin \theta}{r^2} \text{ Tesla}$$

In vector form :-

$$dB = 10^{-7} \frac{I dl \sin \theta}{r^2} \hat{r}$$

$$\frac{\hat{r}}{r} = \frac{\vec{r}}{r^2}$$

$$\vec{dB} = 10^{-7} I \vec{dl} \times \frac{\vec{r}}{r^3}$$

$$\vec{dB} = 10^{-7} \frac{I (\vec{dl} \times \vec{r})}{r^3} \text{ Tesla}$$

or,

$$\vec{dB} = -10^{-7} \frac{I (\vec{r} \times \vec{dl})}{r^3} \text{ Tesla}$$

Thus, the Biot-Savart in expansion

6

योग पूर्व पृष्ठ

पृष्ठ 6 के अंक

कुल अंक



प्रश्न क्र.

of vector form is given by :-
 $\vec{B} = 10^7 \text{ T} (\vec{d}_1 \times \vec{q}_1)$ Tesla.

Question no. → 6

Power of bulb = $P = 200 \text{ watt}$

$V = 220 \text{ V}$

Resistance of bulb = $R = ?$

We know that :

$$P = \frac{V^2}{R}$$

$$R = \frac{V^2}{P}$$

$$R = \frac{(220)^2}{200} = \frac{220 \times 220}{200}$$

$$R = 22 \times 11$$

$$R = 242 \text{ ohm}$$

(Alternate) or,

$$P = \frac{V^2}{R}$$

$$200 = \frac{220 \times 220}{R}$$

$$200 = \frac{48400}{R}$$

$$200R = 48400$$

$$R = \frac{48400}{200}$$

$$R = 242 \text{ ohm}$$

Thus, the resistance of the bulb is

B
S
E

7

योग पूर्व पृष्ठ

पृष्ठ 1 पर 242



242 ohm. (i.e., $R = 242 - 2$)

Question no. → 7

Conjugate foci :- The conjugate foci is defined as the point on the principal axis at which the image is formed when an object is placed near the lens. In the principal axis, when an object is placed at a point at some distance from the optical center of lens then after refraction an image is formed at the principal axis on another point. This point on the principal axis is called conjugate foci. The image formed is always real. So that only convex lens has conjugate foci because convex lens can form real image.





प्रश्न क्र.

Question no. → ⑧

Photoelectric effect :- When ultra violet radiation of suitable frequency become to fall on the photo sensitive substance then the electrons get emitted out just the metal surface. This is called photoelectric emission. The photo electrons ejected out are called photoelectrons.

B
S
E

Einstein photoelectric equation :- On the basis of planck constant Einstein gave the law. He stated that the photon's energy is distributed in two part :-

- (i) Some energy is used by electron to come out the metal surface
- (ii) Some energy is used to give velocity to the electron.

From planck's theory :-

$$E = h\nu \quad (1)$$

~~$$h\nu = \phi_0 + h\nu$$~~

~~$$\phi_0 = h\nu_0$$~~

~~$$h\nu = h\nu_0 + h\nu$$~~

9



पृष्ठ

पृष्ठ 9 के अंक

कुल अंक

$$\phi_0 = \frac{1}{2}mv^2 + h\nu \quad (1)$$

For work function :-

$$\phi_0 = h\nu_0$$

$$(1) \Rightarrow h\nu_0 = \frac{1}{2}mv^2 + h\nu$$

$$\frac{1}{2}mv^2(\text{maxi}) = h\nu - h\nu_0$$

$$\frac{1}{2}mv^2(\text{maxi}) = h(\nu - \nu_0)$$

Question no. → (9)

Two postulates of Bohr's model are as follows :-

Electron are moving in any orbit instead of they are revolving in some specific orbit which are known as non-radiating orbit or stationary orbit. These orbit does not radiate energy.

Electrons revolve only in those orbit in which its angular momentum is an integer multiple of $\frac{h}{2\pi}$, where

h is the Planck's constant.

$$h = 6.67 \times 10^{-34} \text{ J/s}$$

The angular momentum of mass m

प्रश्न क्र.

and velocity v is given by :-

$$p_0 = mvr = \frac{nh}{2\pi r}$$

$$n = 1, 2, 3$$


n is called principle quantum number.

It is called Bohr's Quantum theory.



Question no. → 10

Isotopes :- The number of different elements of atom in which number of proton is same but the number of neutron is different from each other. These are called Isotopes.

For example :- Hydrogen atom has three isotopes.



The two isotopes of hydrogen atom are :-



Question no. → (11)

Fundamental Charge :- Fundamental Charge is defined as the number of electrons flowing in the entire range of conductor. The amount of Coulomb charge present in any conductor by which it shows electrical current is known as fundamental charge.

The value of fundamental charge is
 $e = 1.6 \times 10^{-19}$ Coulomb.

The charge on one electron of the conductor is given by e , and it is also known as electronic charge.

$$e = \pm 1.6 \times 10^{-19} \text{ Coulomb}$$

$$\text{Charge on proton} = +1.6 \times 10^{-19} \text{ Coulomb}$$

$$\text{Charge on electron} = -1.6 \times 10^{-19} \text{ Coulomb}$$

From Quantization of charge :-

$$Q = \pm ne$$

Question no. → (12) (OR)

Ohm's law :- In the physical condition of conductor (i.e., temperature, mechanical strain etc.) remains unchanged then the current flowing in the conductor



प्रश्न क्र.

is directly proportional to the potential difference applied across the end of conductor.

If V be the potential difference and I be the current then

$V \propto I$

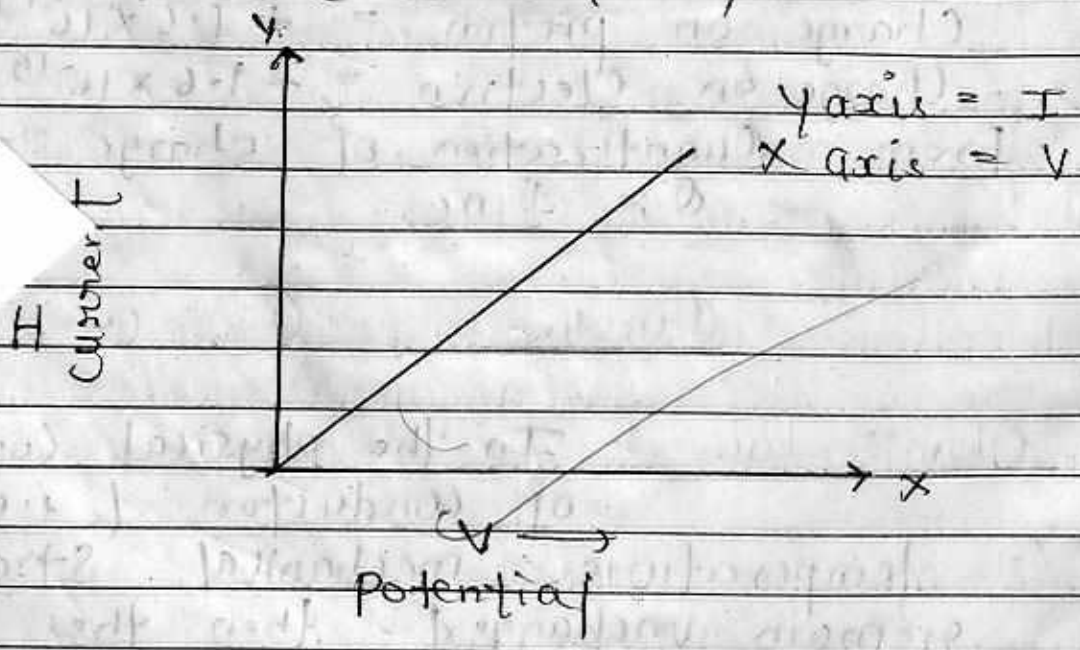
$V = IR$

$R = \frac{V}{I}$


Resistance = $\frac{\text{Potential difference}}{\text{Current}}$

B
S
E

Graph :- when we plot the graph between the voltage V and current I then the straight line is obtained?



13



योग पूरा करें

प्रश्न 13 के अंक



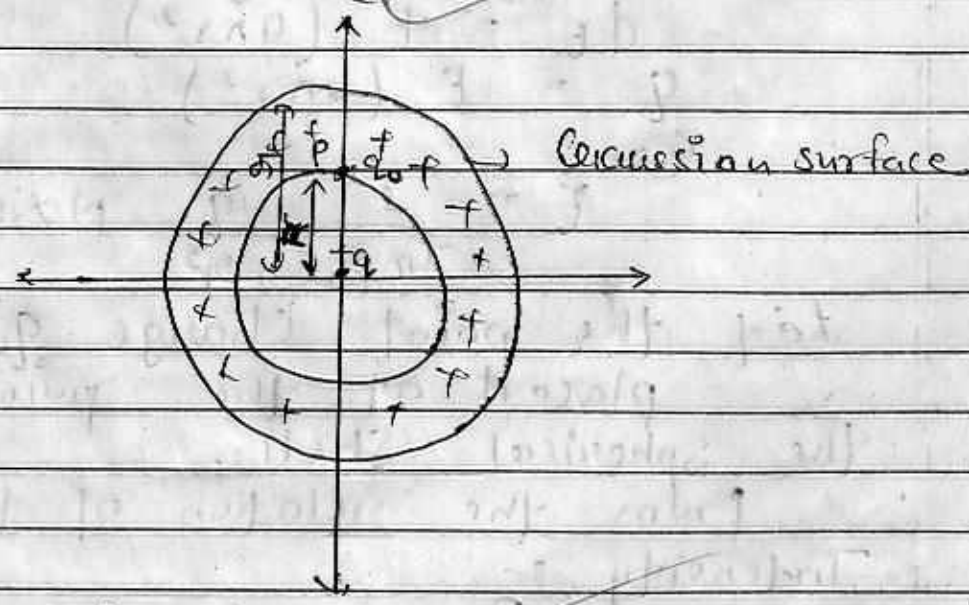
Question no. → 13 (or)

Focal length of convex lens →
 $f = 20 \text{ cm.}$

Question no. → 14

Gauss theorem :- Gauss theorem states that the net electric field linked with a surface is $\frac{1}{\epsilon_0}$ times the net charge enclosed with that surface.

$$\phi_c = \frac{q}{\epsilon_0} \quad \text{--- (1)}$$



Let us consider a spherical shell of radius R. +q charge is distributed along the entire range of spherical shell.



प्रश्न क्र.

Again let the gaussian surface of radius r . The electric field lines are directed radially outwards.

As we know that from the Definition of electric flux :-

$$d\phi_E = \vec{E} \cdot d\vec{s}$$

$$d\phi_E = E ds \cos \theta$$

$$\theta = 0^\circ$$

$$\cos 0 = 1$$

$$d\phi_E = E ds \quad \text{--- (2)}$$

Total Net flux :-

By Integrating the eqn- (2)

$$\int d\phi_E = \int E ds$$

$$\phi_E = E \int ds$$

$$\phi_E = E (4\pi r^2)$$

$$\frac{q}{\epsilon_0} = E (4\pi r^2)$$

$$E = \frac{1}{4\pi\epsilon_0} \frac{q}{r^2} \text{ NxC}^{-1}$$

Let the point charge q_0 is placed at the point on the spherical shell.

From the relation of force and Intensity :-

$$F = \frac{F}{q_0}$$

$$F = q_0 E$$

$$F = q_0 E$$

B
S
E



$$F = \frac{1}{4\pi\epsilon_0} \frac{q_1 q_2}{r^2} \text{ Newton.}$$

This is the Coulomb's law. Force of attraction or repulsion is equal to the product of magnitude of either both charges and square of distance between them (inversely proportional).

~~$$F \propto q_1 q_2$$~~

~~$$F \propto \frac{1}{r^2}$$~~

Question no. → 15

Electromotive.

The maximum potential difference between the end of the cell in open circuit is called electromotive force.

It is existed in open circuit.

It does not depend upon the resistance of conductor.

Potential difference.

(i) The potential difference between the two terminals of the cell in closed circuit is called potential difference.

It is existed in closed circuit.

(ii) It is dependent on the resistance of conductor.



प्रश्न क्र.

and depend on length and area of conductor.

It is also dependent on material of conductor.

(iii) It causes the flow of current in the circuit when connected to cell.

(iii) It is caused due to the flow of current in the circuit.

Question no. → 16

Given,

Power of Bulb A = $P_1 = 100$ watt

Power of Bulb B = $P_2 = 400$ watt

Voltage of both the bulbs are same :-

$$V_1 = V_2 = V$$

Resistance = ?

We know that :-

$$P = \frac{V^2}{R}$$

$$P_1 = \frac{V^2}{R_1}$$

$$R_1 = \frac{V^2}{P_1}$$

$$R_1 = \frac{V^2}{100} \quad \text{--- (1)}$$

B
S
E



$$P_2 = \frac{V^2}{R_2}$$

$$R_2 = \frac{V^2}{P_2}$$

$$R_2 = \frac{V^2}{400} \quad \text{--- (2)}$$

$$\frac{R_1}{R_2} = \frac{V^2}{1100} \times \frac{400}{V^2}$$

$$\frac{R_1}{R_2} = \frac{4}{1}$$

$$R_1 : R_2 = 4 : 1$$

The resistance of the is

$$R_1 : R_2 = 4 : 1$$

Question no. → (17)

Intrinsic Semiconductor

Extrinsic Semiconductor

Intrinsic semiconductor are pure semiconductor.

In extrinsic semiconductor, impurities of tri-valent or pentavalent impurity is added i.e., In N type semiconductor pentavalent and In P type semiconductor trivalent impurity is added.



प्रश्न क्र.

		to pure Semi Conductor.
(ii)	In Intrinsic Semiconductor, electric conduction is possible due to break down of covalent bond.	(ii) In this type of semiconductor - In N type, the electric conduction is due to motion of electron and In P type Semiconductor conduction is due to holes.
B		
S	(iii) In Intrinsic Semi-	(iii) In N type Sem-
E	conductor the number of free electron is equal to number of free holes.	conductor, the electron are more than number of holes and In P type Semiconductor, the number of holes is more than number of electrons.
(iv)	Example of Intrinsic semi-conductors are Pure Germanium and pure Silicon.	(iv) Examples - Aluminium, Gallium, Indium, arsenic, antimony etc.
(v)	The electron density is equal to hole density.	(v) In N type, electron density is more than holes

(20)

योग पूर्व पृष्ठ

+

पृष्ठ 20 के अंक

=

कुल अंक



प्रश्न क्र.

Let the number of turns in primary coil is N_p and number of turns in secondary coil is N_s . Thus the induced emf produced in both the coils are :-

$$E_p = -N_p \frac{dd}{dt} \quad \text{--- (1)}$$

$$E_s = -N_s \frac{dd}{dt} \quad \text{--- (2)}$$

$$\frac{E_p}{E_s} = \frac{N_p}{N_s} \quad \text{--- (3)}$$

B
S
E

The terminal voltage of the primary and secondary coil is given as when the resistance of cell is zero.

$$V_p = E_p$$

$$V_s = E_s$$

$$\frac{V_p}{V_s} = \frac{N_p}{N_s} \quad \text{--- (4)}$$

In the equilibrium condition

The input voltage is equal to output voltage.

The current flow in primary coil is I_p and in secondary coil is I_s then :-

Input Condition = Output Condition.

$$V_p \cdot I_p = V_s \cdot I_s$$



$$\frac{V_p}{V_s} = \frac{I_s}{I_p} \quad (5)$$

from (4) and (5)

$$\frac{V_p}{V_s} = \frac{N_p}{N_s} = \frac{I_s}{I_p} = k$$

Energy loss :-

(i) Copper loss :- The coil of the transformer made of copper wire and copper has already some resistance then due to $H = I^2 R T$ the energy loss is in form of electrical energy.

Reduced the copper loss by using the thick copper wire.

(ii) Magnetic flux leakage :- The magnetic flux linked with primary coil is not associated with secondary coil of transformer there is a loss of energy in air which is called magnetic flux leakage.

It is reduced when the two coils are bound on each other.

(iii) Iron loss :- Some energy is loss due to eddy current.

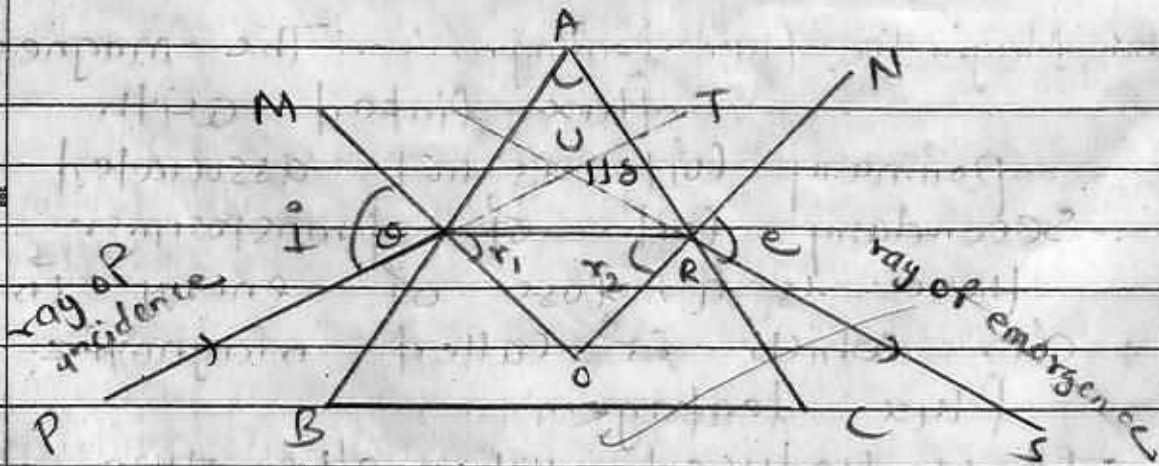
प्रश्न क्र.

which is known as Iron loss. This loss can be reduced when using the laminated core.

Hysteresis :- This loss in form of heat and can be reduced when the coil is made up of soft iron core.

Question no. → (19)

$$d_f = \frac{\sin\left(\frac{A + \delta_m}{2}\right)}{\sin\frac{A}{2}}$$



Prism angle :- The angle subtended between the incident ray and emergent ray is the refracting surface.



of the prism is called prism angle.
 $\angle A = \text{Prism angle}$

Minimum deviation :- The deviation of emergent ray and incident ray are called minimum deviation.

Angle of minimum deviation :- The angle of minimum deviation is that angle when the angle of deviation become minimum at certain incidence ray are called angle of minimum deviation. It is denoted by S_m .

Derivation :-

$$\text{Prism angle} = \angle A$$

$$S_m = \angle TUC$$

$$\angle UOD + \angle UPO = S_m$$

$$(\angle i - r_1) + (\angle e - r_2) = S_m$$

For S_m :-

$$i = e$$

$$r_1 = r_2 = r$$

then,

$$S_m = 2i - 2r \quad \text{--- (1)}$$

For cyclic quadrilateral :-

$\square AOUR$:-



प्रश्न क्र.

$$\angle AOO + \angle HKO \quad (2)$$

$$\angle OAR + \angle OOR = 180^\circ - (3)$$

In $\triangle OOR$:-

$$\angle OOR + \angle OR_1 + \angle OR_2 = 180^\circ - (4)$$

From (3) and (4)

$$\cancel{\angle OOR} + \angle OR_1 + \angle OR_2 = \cancel{\angle OOR} + \angle OAR$$

$$\angle OR_1 + \angle OR_2 = \angle OAR$$

$$r_1 + r_2 = A$$

$$2r = A$$

$$A = 2r$$

$$r = \frac{A}{2} \quad (5)$$

From (1)

$$S_m = 2i - 2r$$

$$S_m = 2i - A$$

$$A + S_m = 2i$$

$$A + S_m = i + e$$

From Snell's law :-

$$r = \frac{\sin i}{\sin r}$$

$$\text{from } S_m = 2i - 2r$$

$$A + S_m = 2i$$

$$A + S_m = 2i$$

$$2i = A + S_m$$

$$i = \frac{A + S_m}{2} \quad (6)$$



From eqn. (5) and (6)

$$l = \frac{\sin \left(\frac{A + \delta_m}{2} \right)}{\sin \frac{A}{2}}$$

proved.

For thin prism :-

$$\sin \frac{A + \delta_m}{2} = \sin \frac{A + \delta_m}{2}$$

$$\sin \frac{A}{2} = \frac{A}{2}$$

$$l = \frac{\sin \frac{A + \delta_m}{2}}{\frac{A}{2}}$$

$$\frac{1}{2} l = \frac{\sin \frac{A + \delta_m}{2}}{A} \Rightarrow l = \frac{A + \delta_m}{A}$$

$$\delta_m = (l - 1) A$$

- ① $\delta_m \propto A$
- ② $\delta_m \propto l$

Question no. → (13)

Radii of curvature of focus :-
10 cm and 15 cm



$$R_1 = +10 \text{ cm}$$

$$R_2 = -15 \text{ cm}$$

Focal length of double
Convex lens = 12 cm

$$\frac{1}{f} = (n-1) \left(\frac{1}{R_1} + \frac{1}{R_2} \right)$$

Refractive index of glass = ?

Refractive index of air = 1

$$n_{\text{air}} = 1$$

$$n_{\text{glass}} = ?$$

$$\frac{1}{f} = (n_{\text{glass}} - 1) \left(\frac{1}{10} + \frac{1}{-15} \right)$$

$$\frac{1}{12} = (n_{\text{glass}} - 1) \left(\frac{1}{10} - \frac{1}{15} \right)$$

$$\frac{1}{12} = (n_{\text{glass}} - 1) \left(\frac{1}{10} + \frac{1}{15} \right)$$

$$\frac{1}{12} = (n_{\text{glass}} - 1) \left(\frac{3+2}{30} \right)$$

$$\frac{1}{12} = (n_{\text{glass}} - 1) \left(\frac{5}{30} \right) \frac{1}{6}$$

$$\frac{1}{12} = (n_{\text{glass}} - 1) \frac{1}{6}$$

$$\frac{1}{12} = \frac{n_{\text{glass}} - 1}{6}$$

$$\frac{n_{\text{glass}} - 1}{6} = \frac{1}{12} + \frac{1}{6}$$

$$\frac{n_{\text{glass}} - 1}{6} = \frac{1+2}{12}$$



$$\frac{44g}{6} = \frac{3}{12}$$

$$12 \times 44g = 18$$

$$44g = \frac{18}{12} = \frac{3}{2}$$

$$44g = \frac{3}{2}$$

$$44g = 1.5$$

Thus, the refractive index of glass is 1.5.

