



केवल मूल्यांकनकर्ता के उपयोग हेतु!

माध्यमिक शिक्षा मण्डल, मध्यप्रदेश, भोपाल

32 पृष्ठीय

केवल परीक्षक द्वारा भरा जावे। प्रश्न क्रमांक के सम्मुख प्राप्तांकों की प्रविष्टि करे।

प्रश्न क्रमांक	पृष्ठ क्रमांक	प्राप्तांक (अंकों में)	प्रश्न क्रमांक	पृष्ठ क्रमांक	प्राप्तांक (अंकों में)
1			17		
2			18		
3			19		
4			20		
5			21		
6			22		
7			23		
8			24		
9			25		
10			26		
11			27		
12			28		
13					
14					
15					
16					

ST-16A4

99.1mm x 33.9mm x 16

ST-16A4

परीक्षक एवं उपमुख्य परीक्षक द्वारा भरा जावे ↓

प्रमाणित किया जाता है कि अन्दर के पृष्ठों के अनुरूप मुख्य पृष्ठ पर अंकों की प्रविष्टि एवं अंकों का योग सही है।

निर्धारित मुद्रा: नाम, पदनाम, मोबाईल नम्बर, परीक्षक क्रमांक एवं पदांकित संस्था के नाम की मुद्रा लगाएं।

परीक्षक एवं उपमुख्य परीक्षक द्वारा भरा जावे

उप मुख्य परीक्षक के हस्ताक्षर एवं निर्धारित मुद्रा

GOVT. H.S. SAROND
V71210011
MOB.-7987189252

परीक्षक के हस्ताक्षर एवं निर्धारित मुद्रा

Shivani Pillai (J.D.)
Johnson H.S. School
V71210068
MOB.-9754201897



प्रश्न क्र.

Question - 01

(a) Ans → (ii) Polarisation

(b) Ans → (i) Material of wire

(c) Ans → (iv) Oersted

(d) Ans → (i) $R = 2f$

(e) Ans → (iii) Isobar

(f) Ans → (iv) Immobile ions

Question - 02

(a) Ans → decreases

(b) Ans → diamagnetic

(c) Ans → displacement

12 = 23



प्रश्न क्र.

Ans. (a) Electrostatic Force - ~~Coulomb~~ (b)

(b) Direction of induced current - ~~Lenz~~ (c)

(c) Electromagnetic Wave - ~~Maxwell~~ (d)

B

(d) Double slit exp. of interference - ~~Young~~ (e)

(e) Dual nature of matter - ~~De-Broglie~~ (f)

(f) Mass-energy equivalence relation - ~~Einstein~~ (g)

Question - 05

(a) Ans. $\rightarrow 1.12 \times 10^{11} \frac{Nm^2}{C}$ (b)

(b) Ans. \rightarrow Ammeter (c)

(c) Ans \rightarrow Power factor is one. (d)

(d) Ans \rightarrow At the angle of minimum deviation

$$23 + 6 = 29$$



प्रश्न क्र.

(e) Ans → ~~p-type semiconductor~~

Answer - 6

Characteristics of electric field lines :-

B
S
E

(i) Electric field lines emerge from positive charge and terminate at negative charge.

(ii) They cannot intersect each other.

(iii) Tangent drawn at any point on it gives the direction of electric field at that point.

Answer - 07 (OR)

(P.T.O)

6

$29 + 2 = 31$



प्रश्न क्र.

Step - up

Step - down

(i) Step up transformer increases the alternating voltage.

Step down transformer decreases the alternating voltage.

B
S
I
(ii) Number of turns in secondary coil are more than primary coil.

Number of turns in primary coil are more than secondary coil.

(iii) Transformation ratio is more than one.

Transformation ratio is less than one.

Answer - 08

Ampere circuital law states that the line integral of magnetic field through any closed surface is equal to the μ_0 times the current passing through it.

7

$$31 + 4 = 35$$



प्रश्न क्र.

Mathematical form,

$$\oint \vec{B} \cdot d\vec{l} = \mu_0 I \quad T.m$$

μ_0 - magnetic permeability
 I - total current

B
S
E

Answer - 09 (OR)

Gamma (γ) rays has the highest frequency in electromagnetic waves.

Use of gamma rays :

They are used to kill unwanted cells in treatment of cancer.

8

35 + 12 = 47



प्रश्न क्र.

Answer - 10 (OR)

If a ray of light enters obliquely from an optically rarer medium to an optically denser medium then velocity will decrease and frequency remains unchanged.

B
S
E

$$\frac{n_d}{n_r} = \frac{v_r}{v_d}$$

and $n_d > n_r$
So,

$$v_r > v_d$$

so, velocity will decrease
we know that,

$$v = \lambda f$$

and $v_r > v_d$ and $\lambda_r > \lambda_d$

so, f is unchanged.

That's why, frequency remains unchanged

9

37 - 4 = 33



प्रश्न क्र.

Answer - 11 (OR)

Features of Nuclear force :-

(i) Nuclear force are short range force. acts between proton - proton, neutron - proton and neutron - neutron. It does not acts for large distance.

(ii) They are attractive in nature.

(iii) They are stronger than coulomb's force in nuclear range.

Answer - 12 (OR)

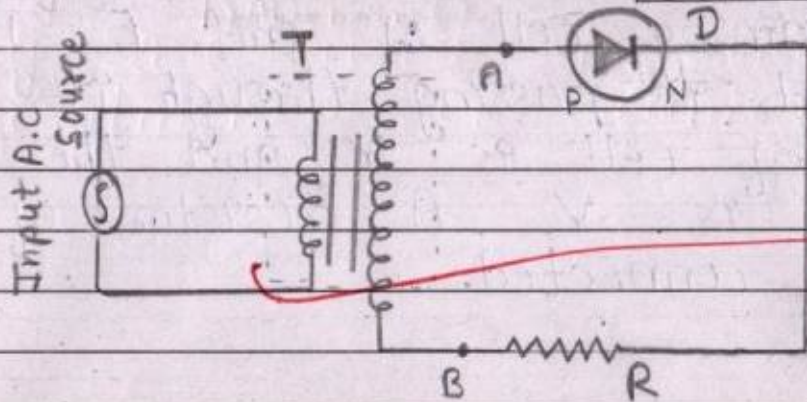



Fig. Half Wave Rectifier

B
S
E

10

14



याग पूव पृ०

प्रश्न क्र.

- T: Step up Transformer
- R: External load resistance
- D: P-n junction diode

B
S
E



Answer - 13

Let a circuit containing cell of emf E . I amount of current is passing through it. Internal resistance of cell is r , and the terminal voltage is V . A resistor of resistance R is connected.

11

$E = IR + Ir$



याग पूर्व पृष्ठ पृष्ठ 11 के ऊपर

प्रश्न क्र.




Fig. Circuit Diagram

B
S
E

By ohm's law,

$$V = IR$$

$$I = \frac{V}{R} \quad \text{--- (i) eq.}$$

Now, the total current is,

$$I = \frac{E}{R+r} \quad \text{--- (ii) eq.}$$

By (i) and (ii) eq.

$$\frac{V}{R} = \frac{E}{R+r}$$

$$V(R+r) = ER$$

$$VR + Vr = ER$$

$$Vr = ER - VR$$

49 + 3 = 44



याग पूव पूव

प्रश्न क्र.

$$Vr = ER - VR$$

$$Vr = R(E - V)$$

$$r = \frac{R(E - V)}{V}$$

$$r = R \left(\frac{E}{V} - 1 \right) \text{ ohm}$$

This is the required relation.
where,

- r = internal resistance
- E = emf of cell
- R = External resistance

Answer - 14

- Given :
- $l = 2 \text{ m}$
 - $N = 100 \text{ turns}$
 - $I = 10 \text{ A}$
 - $\mu_0 = 4\pi \times 10^{-7}$

To find: $B = ?$

S
E

प्रश्न क्र.

By formula,

$$B = \mu_0 n I$$

we know that

$$n = \frac{N}{l}$$

$$\text{So, } B = \mu_0 \frac{N}{l} I$$

$$B = 24\pi \times 10^{-7} \times \frac{100}{2} \times 10$$

$$B = 2 \times 3.14 \times 10^{-7} \times 10^3$$

$$B = 6.28 \times 10^{-4} \text{ Tesla}$$

B
S
E

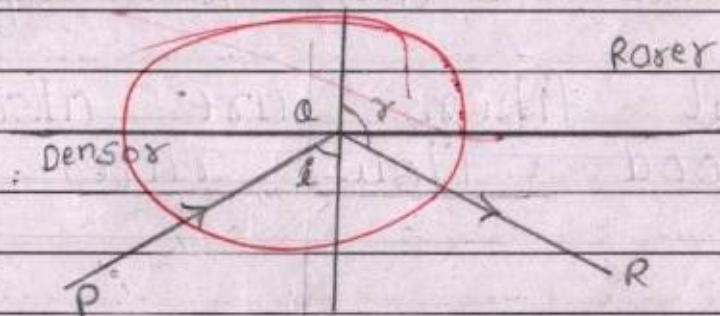
The magnitude of magnetic field is 6.28×10^{-4} Tesla.

Answer - 15

(i) Labelled diagram

PO : Incident ray

OR : reflected ray

 i : angle of incidence

Total Internal Reflection



प्रश्न क्र.

(ii) Definition.

When a light ray travel from denser medium to rarer medium with angle of incidence greater than critical angle than instead of refraction, reflection takes place, this phenomenon is called total internal reflection.

(iii) Application.

One of the most important application of total internal reflection is Optical fibers. They are used to transmit light over long distances without the loss of intensity.

Optical fibers are also used to measure blood flow rate.

B
S
E

प्रश्न क्र.

Answer - 16 (OR)

Characteristics of photons :

(i) Rest ~~mass~~ of photon is zero.

(ii) Photons are electrically neutral, they are not deflected by electric or magnetic fields.

(iii) Photon ~~contains~~ the energy equals to $E = h\nu$. It is measured in electron volt.(iv) Photons ~~are~~ ~~Answer~~ the packets of energy.B
S
E



प्रश्न क्र.


Answer - 17 (OR)

Given : $q_A = 2 \mu\text{C}$
 $= 2 \times 10^{-6} \text{ C}$

$q_B = -2 \mu\text{C}$
 $= -2 \times 10^{-6} \text{ C}$

$r = 40 \text{ cm}$ or 0.4 m

To find : E at mid-point = ?



Electric field at O due to q_A charge.

$$\begin{aligned}
 E_1 &= \frac{1}{4\pi\epsilon_0} \frac{q_A}{r^2} \\
 &= \frac{1}{4\pi\epsilon_0} \frac{2 \times 10^{-6}}{(0.2)^2} \\
 &= \frac{9 \times 10^9 \times 2 \times 10^{-6}}{0.04}
 \end{aligned}$$



$52 + \dots = 52$

प्रश्न क्र.

$$= \frac{9 \times 10^9 \times 2 \times 10^{-6}}{0.04}$$

$$= \frac{9 \times 10^3 \times 2 \times 10050}{42}$$

$$= \frac{450 \times 10^3}{4.5 \times 10^5}$$

E_1

Electric field at O due to q_B

B
S
E

E_2

$$= \frac{1}{4\pi\epsilon_0} \frac{q_B}{(OB)^2}$$

$$= \frac{1}{4\pi\epsilon_0} \frac{2 \times 10^{-6}}{(0.2)^2}$$

$$= \frac{9 \times 10^9 \times 2 \times 10^{-6}}{0.04}$$

$$= \frac{9 \times 10^3 \times 2 \times 10050}{421}$$

$$= 450 \times 10^3$$

$$= 4.5 \times 10^5$$

Total electric field at O

$$E = E_1 + E_2$$

$$= 4.5 \times 10^5 + 4.5 \times 10^5$$

$$E = 9 \times 10^5 \frac{N}{C}$$

Ans



प्रश्न क्र.

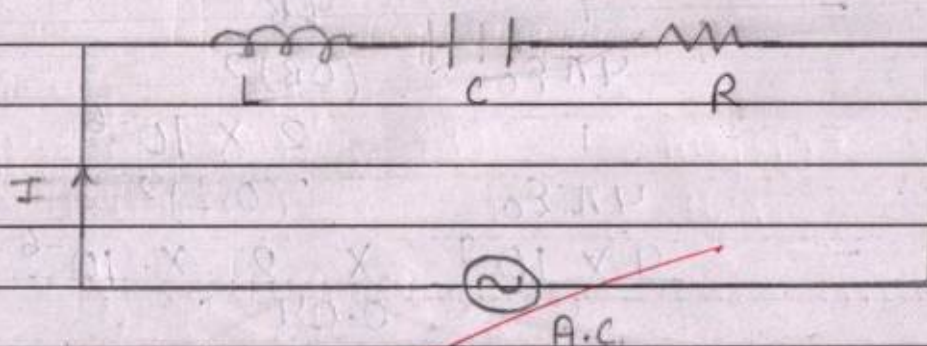
Ans.

Electric field is $9 \times 10^5 \frac{N}{C}$

Answer - 18 (OR)

Let a circuit in which inductor (L), capacitor (C) and Resistor (R) are connected in series.

B
S
E



~~$$E = E_0 \sin \omega t$$~~

~~$$V_0^L = I_0 X_L$$~~

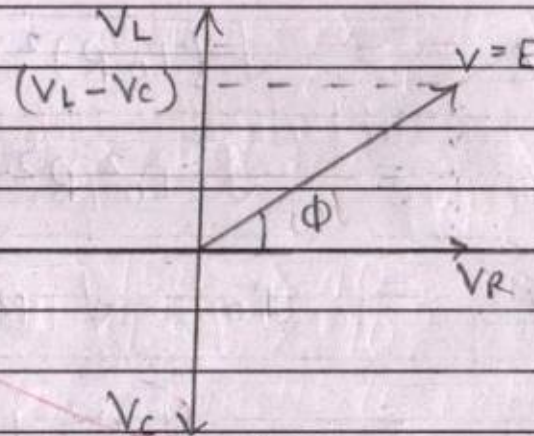
~~$$V_0^C = I_0 X_C$$~~

~~$$V_0^R = I_0 R$$~~

and

~~$$E_0 = I_0 Z$$~~

प्रश्न क्र.



Phasor diagram

from the phasor diagram

Resultant Voltage is,

$$V_0 = \sqrt{(V_0^R)^2 + (V_0^L - V_0^C)^2}$$

$$V = \sqrt{(V^R)^2 + (V^L - V^C)^2}$$

Impedance, (Z)

$$V_0 = \sqrt{(V_0^R)^2 + (V_0^L - V_0^C)^2}$$

$$I_0 Z = \sqrt{(I_0 R)^2 + (I_0 X_L - I_0 X_C)^2}$$

(P.T.O)



प्रश्न क्र.

$$I_0 Z = \sqrt{(I_0 R)^2 + (I_0 X_L - I_0 X_C)^2}$$

$$I_0 Z = \sqrt{I_0^2 R^2 + I_0^2 (X_L - X_C)^2}$$

$$I_0 Z = I_0 \sqrt{R^2 + (X_L - X_C)^2}$$

$$Z = \sqrt{R^2 + (X_L - X_C)^2}$$

B
S
E

this is the impedance.

Phase difference, (ϕ)

phasor diagram,

$$\tan \phi = \frac{V_L - V_C}{V_R}$$

$$\tan \phi = \frac{I X_L - I X_C}{I R}$$

$$\tan \phi = \frac{X_L - X_C}{R}$$

$$\phi = \tan^{-1} \left(\frac{X_L - X_C}{R} \right)$$



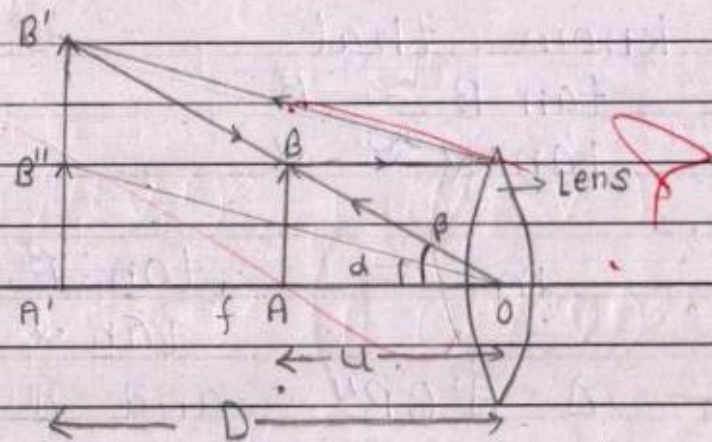
प्रश्न क्र.

$$\text{or, } \phi = \tan^{-1} \left(\frac{\omega L - \frac{1}{\omega C}}{R} \right)$$

This is the phase difference.

Answer - 19 (OR)

Simple microscope is used to see tiny objects.



Simple Microscope

Let a simple microscope of focal length f . An object (AB) is placed at distance u from the centre of lens O .

प्रश्न क्र.

$$m = \frac{AB/AO}{A'B''/A'O}$$

$$m = \frac{AB/AO}{AB/A'O} \quad (\because AB = A'B'')$$

$$m = \frac{A'O}{AO}$$

By sign convention, $A'O = -D$, $AO = -u$

~~$$m = \frac{-D}{-u}$$~~

~~$$m = \frac{D}{u} \quad \text{--- (i) eq.}$$~~

(i) When image is at infinity

then, $u = f$

by (i) eq.

$$m = \frac{D}{f}$$

this is the magnification when image is at ∞ .



प्रश्न क्र.

(ii) when image is at least distance of distinct vision.

By using lens formula.

$$\frac{1}{f} = \frac{1}{v} - \frac{1}{u}$$

$$\frac{1}{f} = \frac{1}{-D} - \frac{1}{-u}$$

$$\frac{1}{f} = -\frac{1}{D} + \frac{1}{u}$$

$$\frac{1}{f} = \frac{-u + D}{Du}$$

$$0 = -1 + \frac{D}{u}$$

$$\frac{D}{u} = \frac{D}{f} + 1$$

by (1) & (2) eq.

$$m = \frac{D+1}{f}$$

This is required expression

B
S
E

2/12/20




प्रश्न क्र.

Answer - 20 (OR)


Nuclear Fusion

Nuclear fusion : When two lighter nucleus are fused together to form a heavy nucleus and liberate large amount of energy then this process is called nuclear fusion.



When two deuterium of atomic mass 2 amu which has the atomic number one, are fused together to form a Helium nucleus of mass 4 amu and has the atomic number 2. In this process energy is released which is 24 MeV. This process is held at very large temperature. That's why it is not possible at laboratories.

B
S
E




प्रश्न क्र.

Formation of hydrogen bomb is based on nuclear fusion. Source of energy in sun is also due to nuclear fusion.

Nuclear Fission

B
S
E

Nuclear fission: When a heavy nucleus is split down into lighter nucleus on ~~to~~ bombarding neutrons on it and large amount of energy is produced in this process. This process is called nuclear fission.

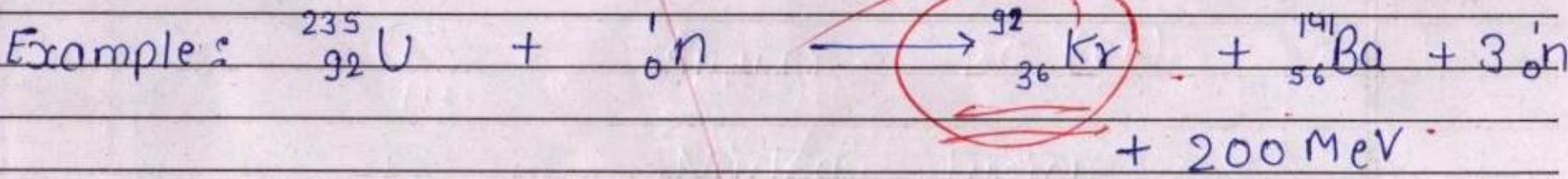


(P.T.O)



3 + 3 = 66

प्रश्न क्र.



When Uranium nucleus is bombarded with neutron then it get split down into ${}_{36}^{92}\text{Kr}$ and ${}_{56}^{141}\text{Ba}$ and neutrons. A huge

B
S
E

amount of energy is released during this process. Released energy is 200 MeV. This process can be done at normal temperature so it can be done in laboratories. Large amount of energy is released in this process as compared to nuclear fusion.